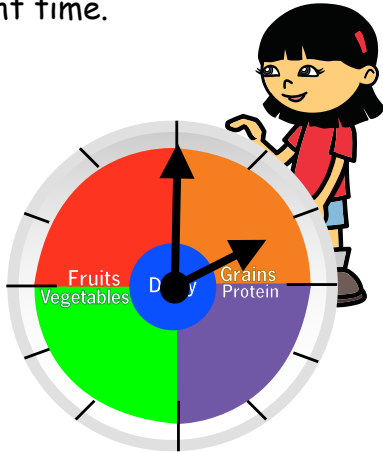


Chef Solus - What Time? Word Problems

Look at the clock next to each set of questions. Use the time to help you calculate the right time.

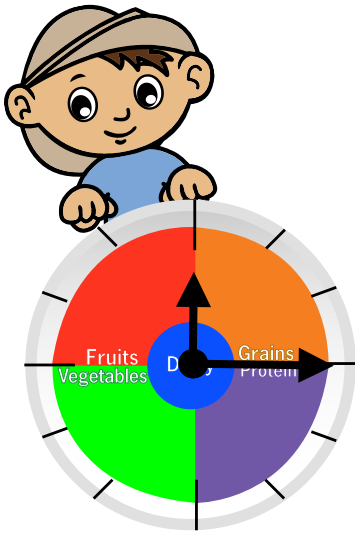


Chef Solus serves dinner at 5:30pm. How long until dinner?

3 1/2 hours

If Chef Solus served lunch at noon, how much time has gone by?

2 hours




Lunch was served at 11:30pm. How many minutes have passed since lunch?

45 minutes

Chef Solus fixed breakfast at 8:15am. How long has it been since you last ate?

4 hours



Bedtime is at 8:30pm. How much longer until it's time for bed?

1 hour and 45 minutes

Chef Solus' last snack of the day will be served in 15min. What time is snack time?

7:00 pm

